


Ratio Identifying Worksheet

Name _____


Write the correct ratio next to the symbol.

1:1




A musical staff with a treble clef and a key signature of one flat (Bb). The notes are: quarter note (Bb), eighth note (A), eighth note (Bb), quarter note (C), half note (D), and whole note (E).

1:1



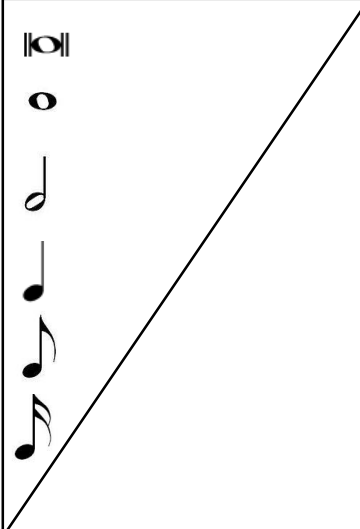
A musical staff with a treble clef and a key signature of one flat (Bb). The notes are: quarter note (Bb), eighth note (A), eighth note (Bb), quarter note (C), half note (D), and whole note (E).

1:1




A musical staff with a treble clef and a key signature of one flat (Bb). The notes are: quarter note (Bb), eighth note (A), eighth note (Bb), quarter note (C), half note (D), and whole note (E).

1:1



A musical staff with a treble clef and a key signature of one flat (Bb). The notes are: quarter note (Bb), eighth note (A), eighth note (Bb), quarter note (C), half note (D), and whole note (E).

1:1



A musical staff with a treble clef and a key signature of one flat (Bb). The notes are: quarter note (Bb), eighth note (A), eighth note (Bb), quarter note (C), half note (D), and whole note (E).